


Name _____

1

(A)



(B)




(C)



(D)



2



(A)



(B)



(C)




(D)



3

(A)



(B)



(C)




(D)




Directions Have children mark the best answer. **1** Which picture shows 0 apples in the basket? **2** Which animal is ninth in line? **3** Which shows a way to make 8?

Name _____


4



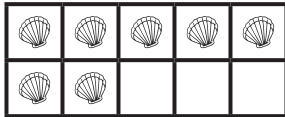
(A)



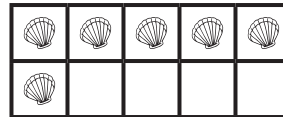
(B)




(C)



(D)



5



(A)

$4 + 3 = 7$

(B)

$5 + 2 = 7$

(C)

$5 + 3 = 8$

(D)

$5 + 4 = 9$

6



(A)

$7 - 3 = 4$

(B)

$8 - 2 = 6$

(C)

$8 - 3 = 5$

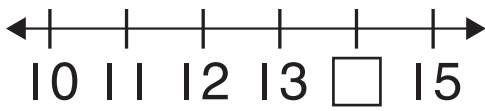
(D)

$8 - 4 = 4$

Directions Have children mark the best answer. 4 Which shows two fewer objects than the group shown? 5 Which addition sentence tells about the groups of flowers? 6 Which subtraction sentence tells about the tacos?

Name _____

7



(A) 13

(B) 14

(C) 16


(D) 17

8


(A)




(B)



(C)




(D)



9

(A)



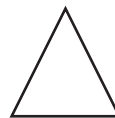
(B)



(C)




(D)



Directions Have children mark the best answer. 7 Which number is missing from the number line? 8 Which picture shows the bookmark to the right of the book? 9 Which shape is the circle?

Name _____

10

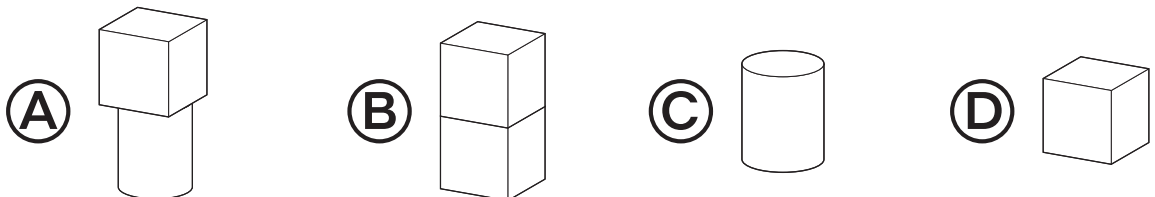
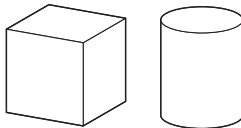


11



- (A) 3 (B) 4 (C) 5 (D) 6

12



Directions Have children mark the best answer. 10 Which object is a cube? 11 How many skiers does the bar graph show? 12 Which shows a shape that can be made from the two objects?